

1. Start Time




End Time




Elapsed Time?

2. Start Time



End Time



Elapsed Time?

3. Start Time



End Time



Elapsed Time?

# ANSWER KEY

1.

Start Time



End Time



Elapsed Time?


**3:08**

2.

Start Time



End Time




Elapsed Time?

**1:43**

3.

Start Time



End Time



Elapsed Time?

**0:02**