

1. Start Time




Elapsed Time?

End Time



2. Start Time




Elapsed Time?

End Time



3. Start Time



Elapsed Time?

End Time



# ANSWER KEY

1.

Start Time



End Time




Elapsed Time?

11:50

2.

Start Time



End Time




Elapsed Time?

7:00

3.

Start Time



End Time



Elapsed Time?

7:10