


1. Start Time



End Time



Elapsed Time?

2. Start Time




End Time



Elapsed Time?

3. Start Time



End Time



Elapsed Time?

# ANSWER KEY

1.

Start Time



End Time



Elapsed Time?

**7:40**

2.

Start Time



End Time



Elapsed Time?

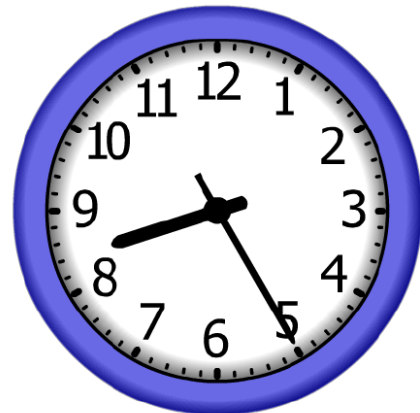
**0:10**

3.

Start Time



End Time



Elapsed Time?

**8:05**