

1. Start Time



End Time



Elapsed Time?

2. Start Time




End Time




Elapsed Time?

3. Start Time



End Time



Elapsed Time?

ANSWER KEY

1.

Start Time



End Time



Elapsed Time?

3:30

2.

Start Time



End Time




Elapsed Time?

10:25

3.

Start Time



End Time



Elapsed Time?

3:30