

4. Start Time



End Time



Elapsed Time?

5. Start Time




End Time




Elapsed Time?

6. Start Time



End Time



Elapsed Time?

ANSWER KEY

4.

Start Time



End Time




Elapsed Time?

6:25

5.

Start Time



End Time



Elapsed Time?

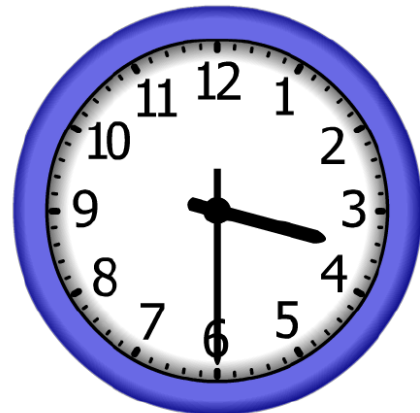
4:35

6.

Start Time



End Time



Elapsed Time?

11:25