

4. Start Time




Elapsed Time

7:00

End Time?

5. Start Time



Elapsed Time

9:00

End Time?

6. Start Time



Elapsed Time

3:00

End Time?

# ANSWER KEY

4. Start Time




Elapsed Time

7:00

End Time?

6:00

5. Start Time




Elapsed Time

9:00

End Time?

7:00

6. Start Time



Elapsed Time

3:00

End Time?

4:00