

1. Start Time

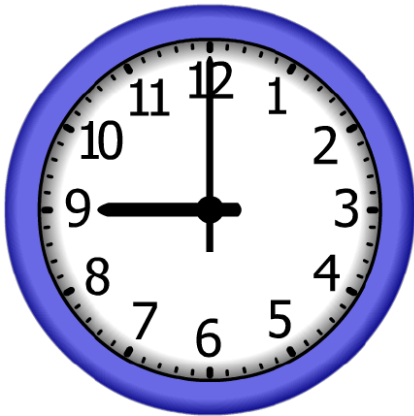


Elapsed Time

9:00

End Time?

2. Start Time




Elapsed Time

10:00

End Time?

3. Start Time



Elapsed Time

10:00

End Time?

ANSWER KEY

1. Start Time



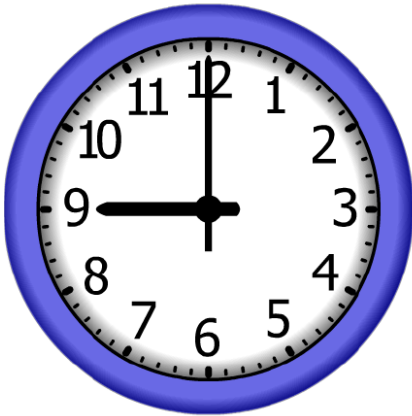
Elapsed Time

9:00

End Time?

8:00

2. Start Time




Elapsed Time

10:00

End Time?

7:00

3. Start Time



Elapsed Time

10:00

End Time?

2:00