

4. Start Time



Elapsed Time

**7:36**

End Time?

5. Start Time




Elapsed Time

**9:47**

End Time?

6. Start Time




Elapsed Time

**4:10**

End Time?

# ANSWER KEY

4. Start Time




Elapsed Time

**7:36**

End Time?

**2:45**

5. Start Time




Elapsed Time

**9:47**

End Time?

**8:31**

6. Start Time



Elapsed Time

**4:10**

End Time?

**12:09**