

Name: _____ Date: _____

4. Start Time



Elapsed Time

2:21

End Time?

5. Start Time




Elapsed Time

6:45

End Time?

6. Start Time




Elapsed Time

3:51

End Time?

ANSWER KEY

4. Start Time




Elapsed Time

2:21

End Time?

10:58

5. Start Time




Elapsed Time

6:45

End Time?

11:39

6. Start Time



Elapsed Time

3:51

End Time?

4:01