

4. Start Time




Elapsed Time

**4:00**

End Time?

5. Start Time




Elapsed Time

**10:10**

End Time?

6. Start Time



Elapsed Time

**3:20**

End Time?

# ANSWER KEY

4. Start Time




Elapsed Time

**4:00**

End Time?

**8:50**

5. Start Time




Elapsed Time

**10:10**

End Time?

**7:00**

6. Start Time



Elapsed Time

**3:20**

End Time?

**3:00**