

Name: _____ Date: _____

1. Start Time




Elapsed Time

11:30

End Time?

2. Start Time



Elapsed Time

1:10

End Time?

3. Start Time



Elapsed Time

7:30

End Time?

ANSWER KEY

1. Start Time




Elapsed Time

11:30

End Time?

7:10

2. Start Time




Elapsed Time

1:10

End Time?

4:50

3. Start Time



Elapsed Time

7:30

End Time?

10:20