

4. Start Time




Elapsed Time

**5:40**

End Time?

5. Start Time




Elapsed Time

**6:30**

End Time?

6. Start Time



Elapsed Time

**2:10**

End Time?

# ANSWER KEY

4. Start Time




Elapsed Time

**5:40**

End Time?

**11:30**

5. Start Time




Elapsed Time

**6:30**

End Time?

**3:50**

6. Start Time



Elapsed Time

**2:10**

End Time?

**4:50**