

Name: _____ Date: _____

1. Start Time

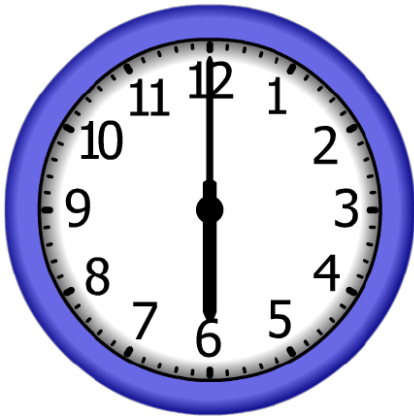


Elapsed Time

0:40

End Time?

2. Start Time




Elapsed Time

5:40

End Time?

3. Start Time



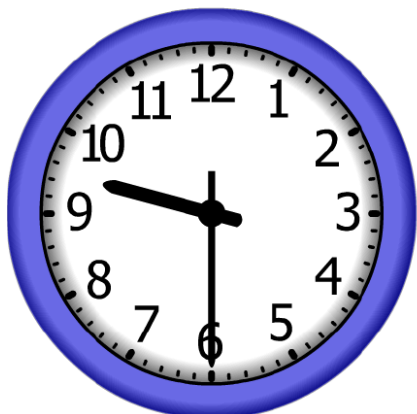
Elapsed Time

11:00

End Time?

ANSWER KEY

1. Start Time



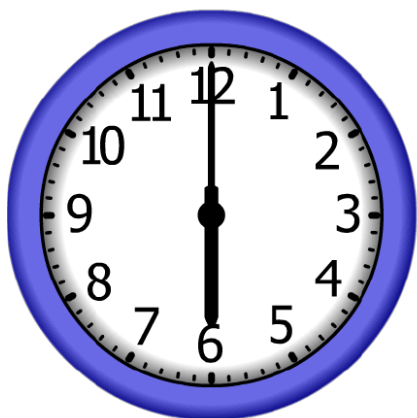
Elapsed Time

0:40

End Time?

10:10

2. Start Time




Elapsed Time

5:40

End Time?

11:40

3. Start Time



Elapsed Time

11:00

End Time?

11:10