

4. Start Time




Elapsed Time

**4:45**

End Time?

5. Start Time



Elapsed Time

**9:15**

End Time?

6. Start Time




Elapsed Time

**9:30**

End Time?

# ANSWER KEY

4. Start Time




Elapsed Time

**4:45**

End Time?

**11:00**

5. Start Time



Elapsed Time

**9:15**

End Time?

**11:00**

6. Start Time



Elapsed Time

**9:30**

End Time?

**1:45**