

4. Start Time




Elapsed Time

**2:45**

End Time?

5. Start Time




Elapsed Time

**9:30**

End Time?

6. Start Time



Elapsed Time

**1:00**

End Time?

# ANSWER KEY

4. Start Time




Elapsed Time

**2:45**

End Time?

**12:15**

5. Start Time




Elapsed Time

**9:30**

End Time?

**7:45**

6. Start Time



Elapsed Time

**1:00**

End Time?

**1:45**