

1. Start Time




Elapsed Time

3:15

End Time?

2. Start Time




Elapsed Time

1:45

End Time?

3. Start Time




Elapsed Time

3:00

End Time?

ANSWER KEY

1. Start Time




Elapsed Time

3:15

End Time?

10:15

2. Start Time




Elapsed Time

1:45

End Time?

12:00

3. Start Time



Elapsed Time

3:00

End Time?

12:30