

Name: _____ Date: _____

1. Start Time

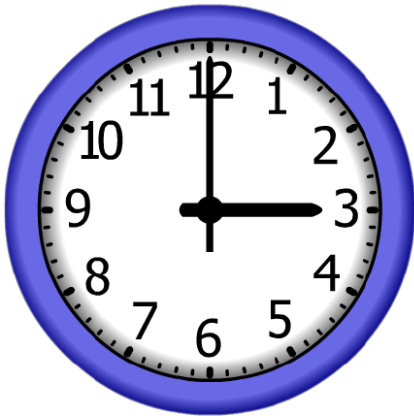


Elapsed Time

5:15

End Time?

2. Start Time




Elapsed Time

7:45

End Time?

3. Start Time



Elapsed Time

8:30

End Time?

ANSWER KEY

1. Start Time



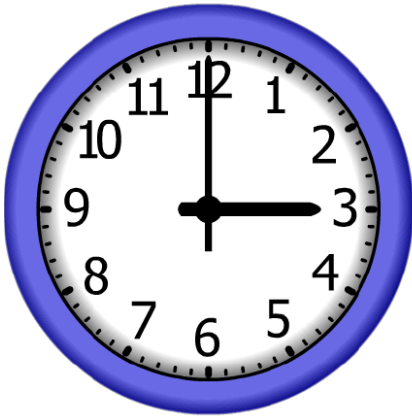
Elapsed Time

5:15

End Time?

12:45

2. Start Time




Elapsed Time

7:45

End Time?

10:45

3. Start Time



Elapsed Time

8:30

End Time?

9:15