


4. Start Time




Elapsed Time

1:30

End Time?

5. Start Time



Elapsed Time

11:00

End Time?

6. Start Time



Elapsed Time

9:30

End Time?

ANSWER KEY

4. Start Time




Elapsed Time

1:30

End Time?

6:00

5. Start Time




Elapsed Time

11:00

End Time?

6:30

6. Start Time



Elapsed Time

9:30

End Time?

8:30