


4. Start Time




Elapsed Time

8:30

End Time?

5. Start Time




Elapsed Time

7:30

End Time?

6. Start Time



Elapsed Time

8:30

End Time?

ANSWER KEY

4. Start Time




Elapsed Time

8:30

End Time?

8:00

5. Start Time




Elapsed Time

7:30

End Time?

9:00

6. Start Time



Elapsed Time

8:30

End Time?

12:30