


Name: _____ Date: _____

1. Start Time



Elapsed Time

9:30

End Time?

2. Start Time



Elapsed Time

11:00

End Time?

3. Start Time




Elapsed Time

0:30

End Time?

ANSWER KEY

1. Start Time




Elapsed Time

9:30

End Time?

9:30

2. Start Time



Elapsed Time

11:00

End Time?

4:00

3. Start Time



Elapsed Time

0:30

End Time?

7:00