

4. Start Time




Elapsed Time

5:30

End Time?

5. Start Time




Elapsed Time

2:30

End Time?

6. Start Time



Elapsed Time

6:30

End Time?

ANSWER KEY

4. Start Time



Elapsed Time

5:30

End Time?

6:30

5. Start Time




Elapsed Time

2:30

End Time?

9:30

6. Start Time



Elapsed Time

6:30

End Time?

8:30