

Name: _____ Date: _____

1. Start Time



Elapsed Time

5:30

End Time?

2. Start Time




Elapsed Time

8:30

End Time?

3. Start Time



Elapsed Time

7:30

End Time?

ANSWER KEY

1. Start Time




Elapsed Time

5:30

End Time?

11:00

2. Start Time



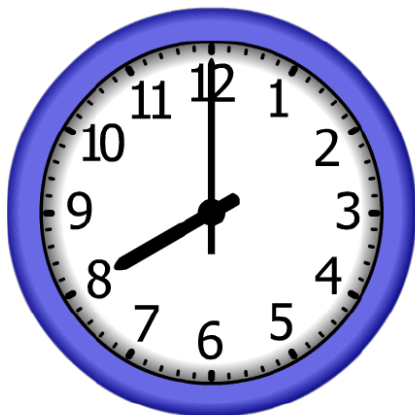
Elapsed Time

8:30

End Time?

9:30

3. Start Time



Elapsed Time

7:30

End Time?

3:30