


4. Start Time



Elapsed Time

8:30

End Time?

5. Start Time




Elapsed Time

5:30

End Time?

6. Start Time



Elapsed Time

6:00

End Time?

ANSWER KEY

4. Start Time




Elapsed Time

8:30

End Time?

10:00

5. Start Time




Elapsed Time

5:30

End Time?

10:30

6. Start Time



Elapsed Time

6:00

End Time?

11:00