

4. Start Time




Elapsed Time

**1:10**

End Time?

5. Start Time

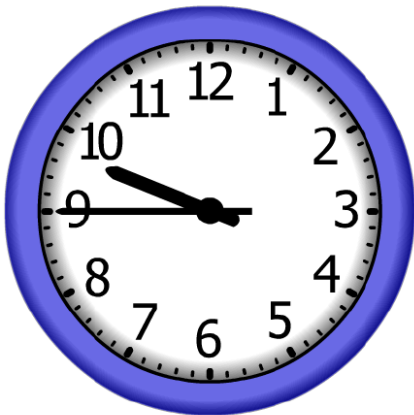


Elapsed Time

**6:15**

End Time?

6. Start Time




Elapsed Time

**8:35**

End Time?

# ANSWER KEY

4. Start Time



Elapsed Time

**1:10**

End Time?

**5:25**

5. Start Time



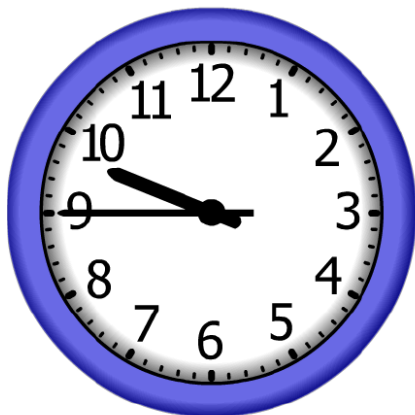
Elapsed Time

**6:15**

End Time?

**10:25**

6. Start Time



Elapsed Time

**8:35**

End Time?

**6:20**