

4. Start Time



Elapsed Time

**0:35**

End Time?

5. Start Time




Elapsed Time

**1:55**

End Time?

6. Start Time




Elapsed Time

**3:45**

End Time?

# ANSWER KEY

4. Start Time



Elapsed Time

**0:35**

End Time?

**3:55**

5. Start Time




Elapsed Time

**1:55**

End Time?

**8:25**

6. Start Time



Elapsed Time

**3:45**

End Time?

**2:00**