

Name: _____ Date: _____

4. Start Time



Elapsed Time

3:10

End Time?

5. Start Time



Elapsed Time

10:40

End Time?

6. Start Time




Elapsed Time

5:45

End Time?

ANSWER KEY

4. Start Time




Elapsed Time

3:10

End Time?

5:00

5. Start Time




Elapsed Time

10:40

End Time?

2:45

6. Start Time



Elapsed Time

5:45

End Time?

1:35