

4. Start Time



Elapsed Time

**11:30**

End Time?

5. Start Time



Elapsed Time

**11:30**

End Time?

6. Start Time




Elapsed Time

**4:35**

End Time?

# ANSWER KEY

4. Start Time




Elapsed Time

**11:30**

End Time?

**8:25**

5. Start Time




Elapsed Time

**11:30**

End Time?

**1:55**

6. Start Time



Elapsed Time

**4:35**

End Time?

**8:00**