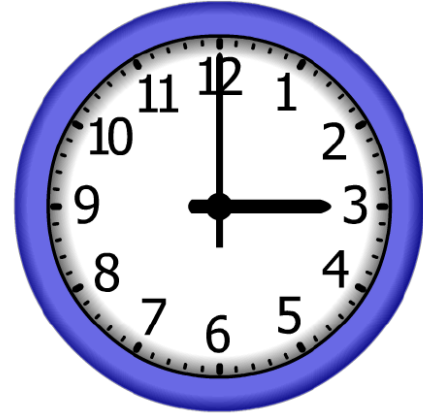


4.

Start Time?

Elapsed Time

End Time




5.

Start Time?

Elapsed Time

End Time



6.

Start Time?

Elapsed Time

End Time



ANSWER KEY

4.


Start Time?

1:00

Elapsed Time

2:00

End Time



5.


Start Time?

3:00

Elapsed Time

9:00

End Time



6.

Start Time?

8:00

Elapsed Time

5:00

End Time

