


Name: _____ Date: _____

1.

Start Time?

Elapsed Time

End Time



2.

Start Time?

Elapsed Time

End Time




3.

Start Time?

Elapsed Time

End Time



ANSWER KEY

1.


Start Time?

4:00

Elapsed Time

4:00

End Time



2.

Start Time?

12:00

Elapsed Time

5:00

End Time



3.

Start Time?

11:00

Elapsed Time

11:00

End Time

