

4.

Start Time?

Elapsed Time

End Time




5.

Start Time?

Elapsed Time

End Time




6.

Start Time?

Elapsed Time

End Time



ANSWER KEY

4.


Start Time?

6:00

Elapsed Time

11:00

End Time



5.


Start Time?

5:00

Elapsed Time

9:00

End Time



6.

Start Time?

11:00

Elapsed Time

8:00

End Time

