

4.

Start Time?

Elapsed Time

End Time




5.

Start Time?

Elapsed Time

End Time



6.

Start Time?

Elapsed Time

End Time



ANSWER KEY

4.


Start Time?

5:44

Elapsed Time

2:34

End Time



5.


Start Time?

8:46

Elapsed Time

7:19

End Time



6.

Start Time?

8:02

Elapsed Time

6:23

End Time

