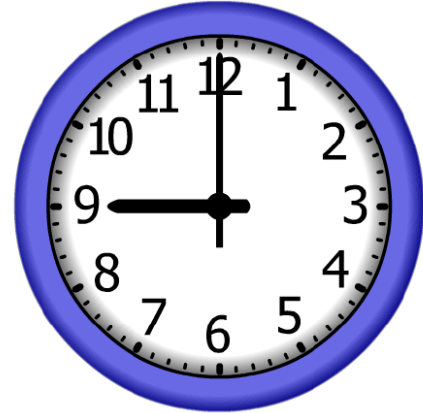


4.

Start Time?

Elapsed Time

End Time




5.

Start Time?

Elapsed Time

End Time



6.

Start Time?

Elapsed Time

End Time



ANSWER KEY

4.

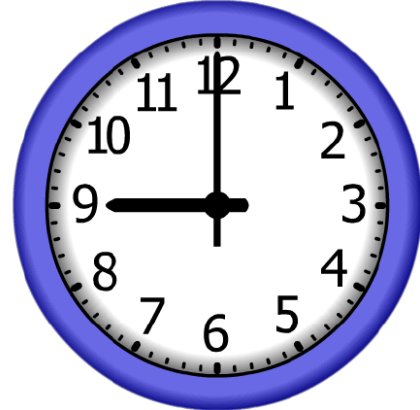
Start Time?

1:20

Elapsed Time

7:40

End Time



5.


Start Time?

12:10

Elapsed Time

7:50

End Time



6.

Start Time?

1:50

Elapsed Time

7:00

End Time

