


4.

Start Time?

Elapsed Time

End Time




5.

Start Time?

Elapsed Time

End Time




6.

Start Time?

Elapsed Time

End Time



ANSWER KEY

4.

Start Time?

3:20

Elapsed Time

0:50

End Time



5.

Start Time?

12:10

Elapsed Time

2:30

End Time



6.

Start Time?

5:20

Elapsed Time

10:10

End Time

