


4.

Start Time?

Elapsed Time

End Time




5.

Start Time?

Elapsed Time

End Time

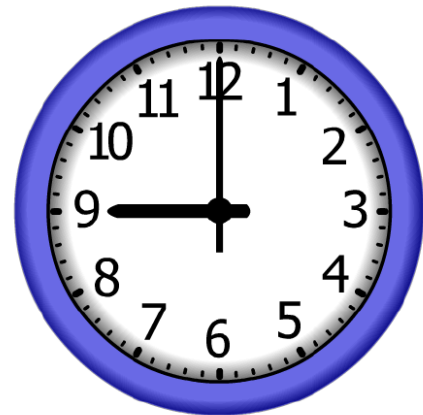


6.

Start Time?

Elapsed Time

End Time



ANSWER KEY

4.

Start Time?

4:15

Elapsed Time

4:15

End Time



5.


Start Time?

10:45

Elapsed Time

2:00

End Time



6.

Start Time?

2:15

Elapsed Time

6:45

End Time

