

4.

Start Time?

Elapsed Time

End Time




5.

Start Time?

Elapsed Time

End Time




6.

Start Time?

Elapsed Time

End Time



# ANSWER KEY

4.

Start Time?

**8:00**

Elapsed Time

**11:00**

End Time



5.


Start Time?

**7:30**

Elapsed Time

**6:30**

End Time



6.

Start Time?

**10:00**

Elapsed Time

**0:30**

End Time

