


Name: _____ Date: _____

1.

Start Time?

Elapsed Time

End Time




2.

Start Time?

Elapsed Time

End Time



3.

Start Time?

Elapsed Time

End Time



ANSWER KEY

1.


Start Time?

8:00

Elapsed Time

4:30

End Time



2.


Start Time?

1:30

Elapsed Time

1:00

End Time



3.

Start Time?

4:30

Elapsed Time

9:30

End Time

