


4.

Start Time?

Elapsed Time

End Time




5.

Start Time?

Elapsed Time

End Time

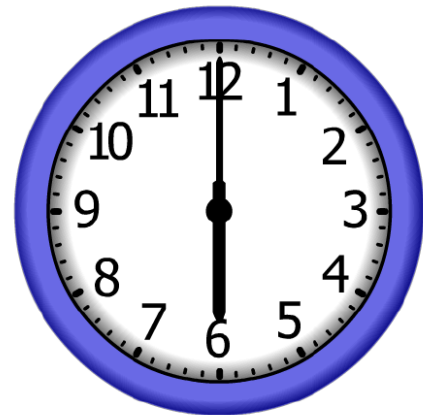


6.

Start Time?

Elapsed Time

End Time



ANSWER KEY

4.

Start Time?

12:00

Elapsed Time

4:30

End Time



5.


Start Time?

5:00

Elapsed Time

3:00

End Time



6.

Start Time?

9:30

Elapsed Time

8:30

End Time

