


Name: _____ Date: _____

1.

Start Time?

Elapsed Time

End Time




2.

Start Time?

Elapsed Time

End Time



3.

Start Time?

Elapsed Time

End Time



ANSWER KEY

1.


Start Time?

3:00

Elapsed Time

7:30

End Time



2.


Start Time?

9:00

Elapsed Time

5:00

End Time



3.

Start Time?

12:30

Elapsed Time

10:30

End Time

