

Name: _____ Date: _____

1.

Start Time?

Elapsed Time

End Time




2.

Start Time?

Elapsed Time

End Time




3.

Start Time?

Elapsed Time

End Time



ANSWER KEY

1.

Start Time?

4:55

Elapsed Time

7:45

End Time



2.

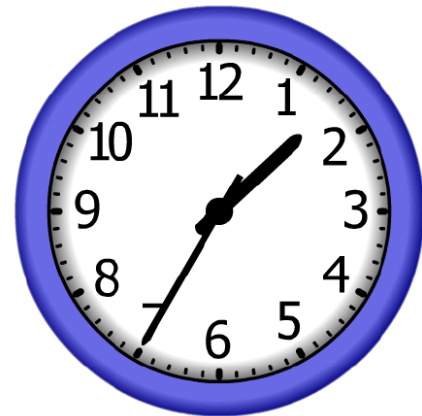
Start Time?

10:45

Elapsed Time

2:50

End Time



3.

Start Time?

2:00

Elapsed Time

9:50

End Time

