

4.

Start Time



End Time



Elapsed Time?

5.

Start Time




End Time



Elapsed Time?

6.

Start Time



End Time



Elapsed Time?


ANSWER KEY

4.

Start Time



End Time



Elapsed Time?

1:51

5.

Start Time



End Time




Elapsed Time?

1:28

6.

Start Time



End Time



Elapsed Time?

8:01