


1. Start Time



End Time



Elapsed Time?

2. Start Time



End Time




Elapsed Time?

3. Start Time



End Time



Elapsed Time?


# ANSWER KEY

1.

Start Time



End Time



Elapsed Time?


**0:40**

2.

Start Time



End Time



Elapsed Time?

**6:30**

3.

Start Time



End Time



Elapsed Time?

**8:59**