

4. Start Time




End Time

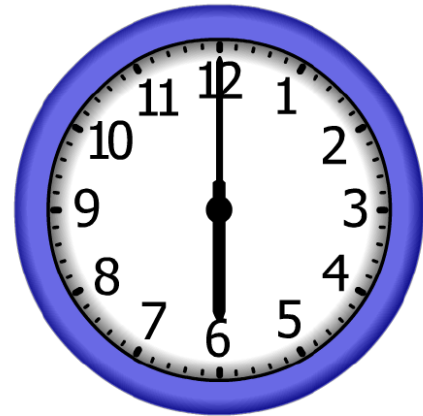


Elapsed Time?

5. Start Time



End Time



Elapsed Time?

6. Start Time



End Time



Elapsed Time?

ANSWER KEY

4.

Start Time



End Time




Elapsed Time?

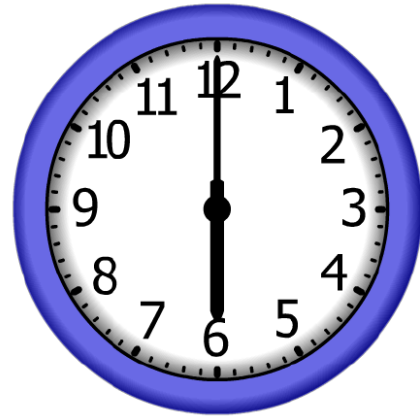
6:00

5.

Start Time



End Time



Elapsed Time?

2:30

6.

Start Time



End Time



Elapsed Time?

11:00