

4. Start Time




End Time



Elapsed Time?

5. Start Time



End Time




Elapsed Time?

6. Start Time



End Time



Elapsed Time?

ANSWER KEY

4. Start Time




End Time



Elapsed Time?

2:00

5. Start Time



End Time




Elapsed Time?

5:40

6. Start Time



End Time



Elapsed Time?

2:50