


1. Start Time




End Time



Elapsed Time?

2. Start Time



End Time



Elapsed Time?

3. Start Time



End Time




Elapsed Time?

ANSWER KEY

1.

Start Time



End Time



Elapsed Time?

5:40

2.

Start Time



End Time



Elapsed Time?


2:35

3.

Start Time



End Time



Elapsed Time?

8:15