

4.

Start Time



End Time



Elapsed Time?

5.

Start Time




End Time




Elapsed Time?

6.

Start Time



End Time



Elapsed Time?

ANSWER KEY

4.

Start Time



End Time



Elapsed Time?

9:25

5.

Start Time



End Time




Elapsed Time?


9:55

6.

Start Time



End Time



Elapsed Time?

8:35