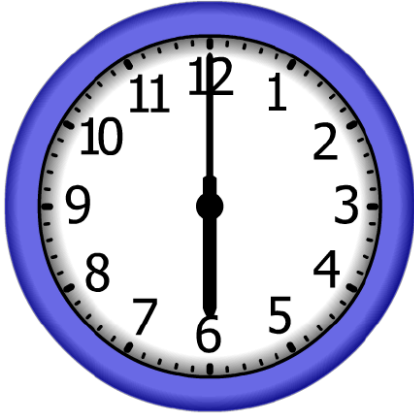


1. Start Time




Elapsed Time

1:00

End Time?

2. Start Time




Elapsed Time

4:00

End Time?

3. Start Time




Elapsed Time

2:00

End Time?

ANSWER KEY

1. Start Time



Elapsed Time

1:00

End Time?

7:00

2. Start Time




Elapsed Time

4:00

End Time?

11:00

3. Start Time



Elapsed Time

2:00

End Time?

6:00