

1. Start Time



Elapsed Time

5:00

End Time?

2. Start Time




Elapsed Time

9:00

End Time?

3. Start Time



Elapsed Time

8:00

End Time?

ANSWER KEY

1. Start Time




Elapsed Time

5:00

End Time?

6:00

2. Start Time




Elapsed Time

9:00

End Time?

2:00

3. Start Time



Elapsed Time

8:00

End Time?

9:00