

1. Start Time




Elapsed Time

**1:00**

End Time?

2. Start Time




Elapsed Time

**4:00**

End Time?

3. Start Time



Elapsed Time

**4:00**

End Time?

# ANSWER KEY

1. Start Time




Elapsed Time

1:00

End Time?

2:00

2. Start Time




Elapsed Time

4:00

End Time?

11:00

3. Start Time



Elapsed Time

4:00

End Time?

11:00