


4. Start Time



Elapsed Time

7:00

End Time?

5. Start Time




Elapsed Time

4:00

End Time?

6. Start Time




Elapsed Time

8:00

End Time?

ANSWER KEY

4. Start Time



Elapsed Time

7:00

End Time?

7:00

5. Start Time




Elapsed Time

4:00

End Time?

3:00

6. Start Time



Elapsed Time

8:00

End Time?

1:00