

4. Start Time




Elapsed Time

**4:42**

End Time?

5. Start Time




Elapsed Time

**3:55**

End Time?

6. Start Time



Elapsed Time

**11:40**

End Time?

# ANSWER KEY

4. Start Time




Elapsed Time

**4:42**

End Time?

**3:22**

5. Start Time




Elapsed Time

**3:55**

End Time?

**5:32**

6. Start Time



Elapsed Time

**11:40**

End Time?

**9:57**